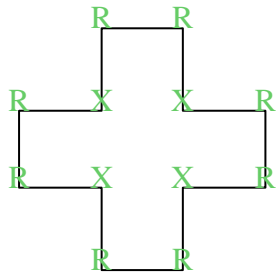





Count the number of Acute, Obtuse and Right and Reflex angles in each shape.


Ex)



1)



2)



Answers

A O R X

Ex. 0 0 8 4

1. _____

2. _____

3. _____

4. _____

5. _____

6. _____

7. _____

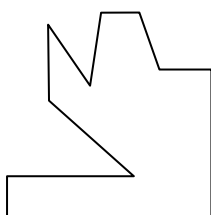
8. _____

9. _____

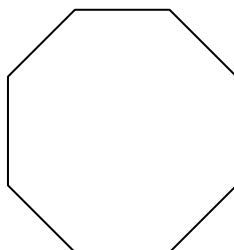
10. _____

11. _____

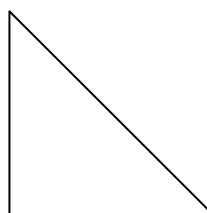
3)



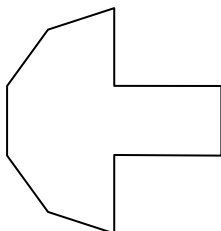
4)



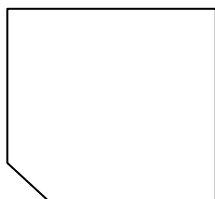
5)



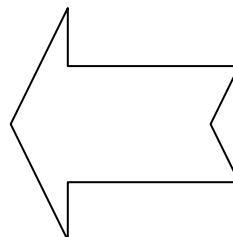
6)



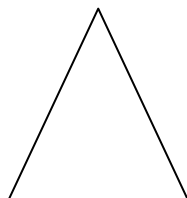
7)



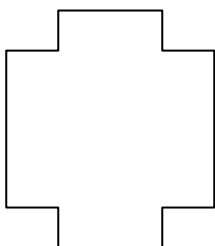
8)



9)



10)



11)



